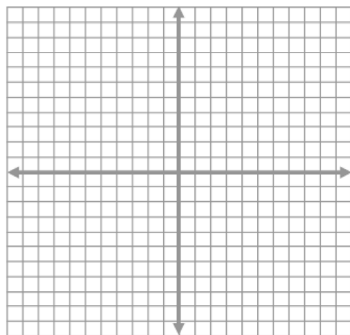
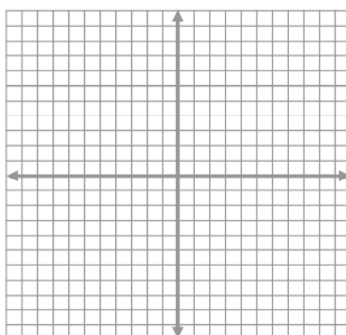


1. $(8, 4)$ and $(-4, -5)$



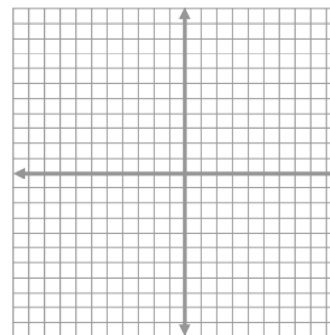
$m =$ _____ equation: _____

2. $(-2, 9)$ and $(6, -11)$



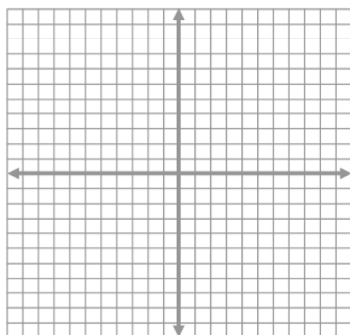
$m =$ _____ equation: _____

3. $(6, 3)$ and $(-5, -8)$



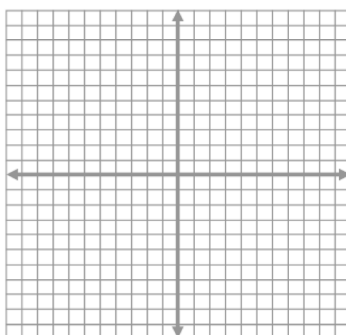
$m =$ _____ equation: _____

4. $(-2, 11)$ and $(3, -4)$



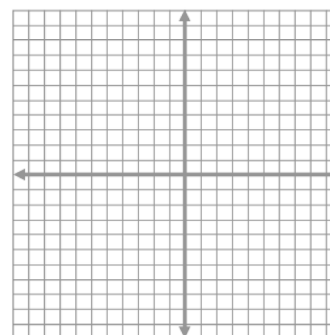
$m =$ _____ equation: _____

5. $(1, 4)$ and $(3, 12)$



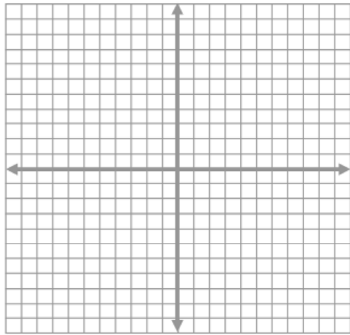
$m =$ _____ equation: _____

6. $(2, 3)$ and $(-4, 3)$



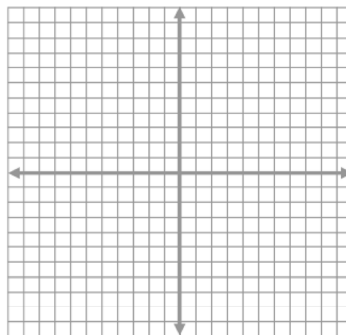
$m =$ _____ equation: _____

7. $(-4, 5)$ and $(-4, -3)$



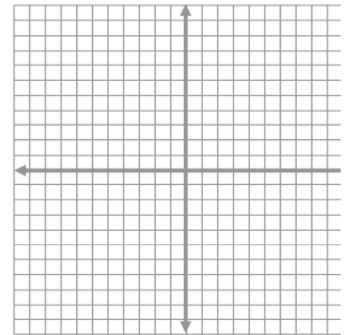
m = _____ equation: _____

8. $(-6, 5)$ and $(2, 5)$



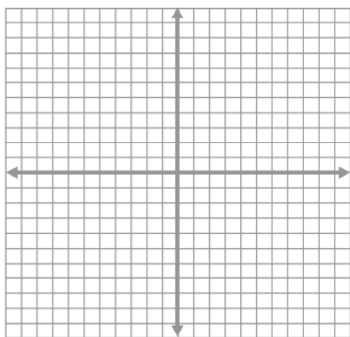
m = _____ equation: _____

9. $(9, -6)$ and $(-6, 4)$



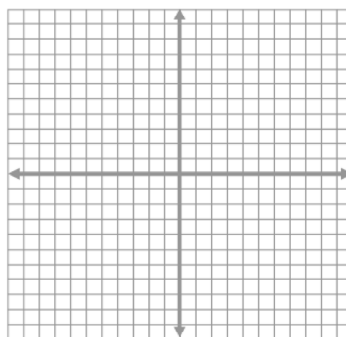
m = _____ equation: _____

10. $(-3, 9)$ and $(5, 1)$



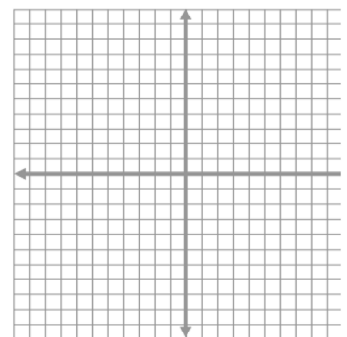
m = _____ equation: _____

11. $(4, 5)$ and $(-3, -9)$



m = _____ equation: _____

12. $(-10, 2)$ and $(-5, -1)$



m = _____ equation: _____