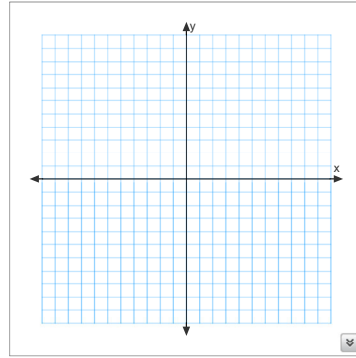


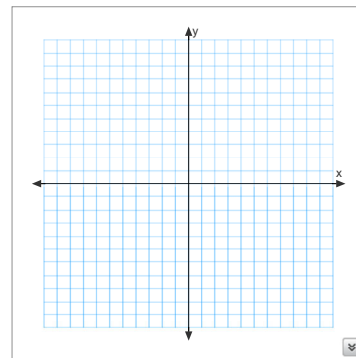
1.

x	$y = \frac{2}{3}x$	y
-12		
-9		
-6		
-3		
0		
3		
6		
9		
12		



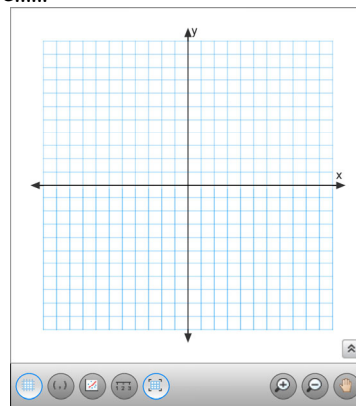
2.

x	$y = -\frac{3}{4}x + 1$	y
-12		
-8		
-4		
0		
4		
8		
12		

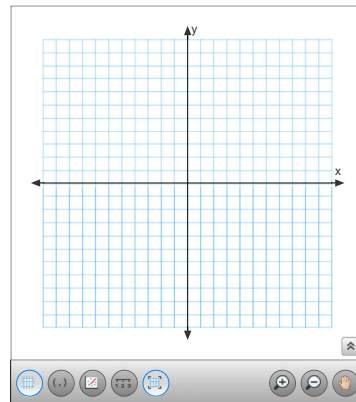


Make up some if you need more.....

x		y



x		y



Practice Exponents (or whatever your students need)