

GEO WU S2 w8d2 Response.notebook

Geometry Warm-up

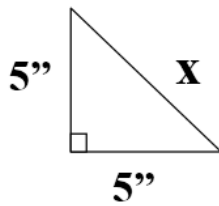
2<sup>nd</sup> Semester**Simplify**

Use clicker to answer 1- 10.

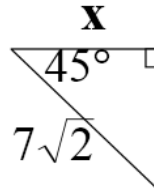
1)  $\sqrt{72}$       2)  $\sqrt{200}$       3)  $(5\sqrt{2})(-4\sqrt{3})$       4)  $\sqrt{50} + \sqrt{27}$

**Find the exact answer for x.**

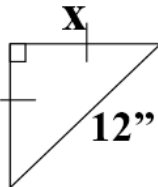
5.



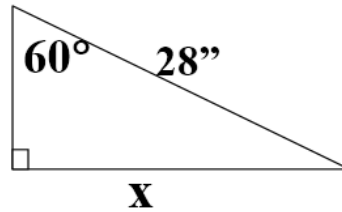
6.



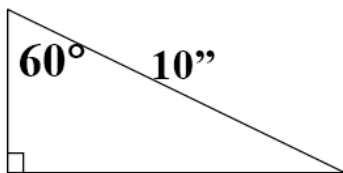
7.



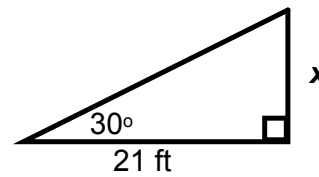
8.



9.



10.



GEO S2 w8d3 WU Response.notebook

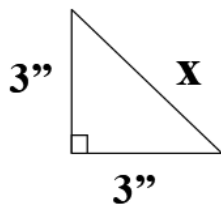
Use clicker to enter 1-9...in simplified radical form

*Geometry Warm-up**2<sup>nd</sup> Semester**Week 8 – Block Day***Simplify**

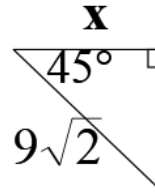
1)  $\sqrt{63}$     2)  $\sqrt{600}$     3)  $(7\sqrt{6})(-4\sqrt{3})$     4)  $\sqrt{500} - \sqrt{45}$

**Find the exact answer for x.**

5.



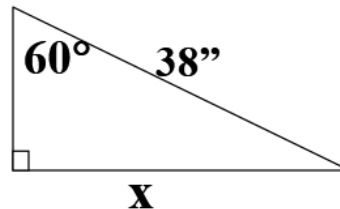
6.



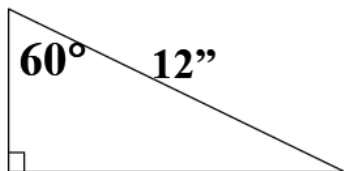
7.



8.



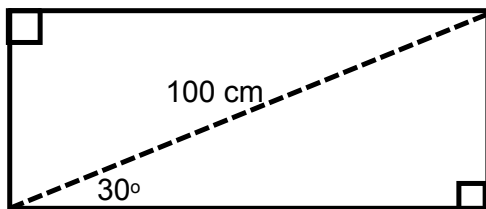
9. x



Geometry 2nd Semester Week 8 Friday - Warm-up

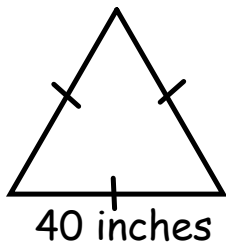
Find the area and perimeter of each figure. Leave answers in **simplified radical form.** GEO S2 w7d4 Response.notebook

Enter 1-6 using clicker. Do not enter units.



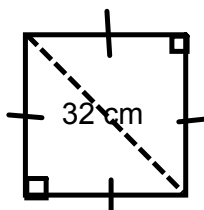
1. Perimeter

2. Area



3. Perimeter

4. Area



5. Perimeter

6. Area

**February 26, 2016**

## Attachments

---

GEO WU S2 w8d2 Response.notebook

GEO S2 w8d3 WU Response.notebook

GEO S2 w7d4 Response.notebook