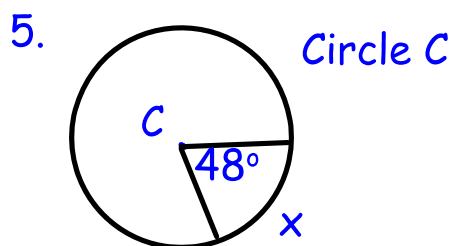
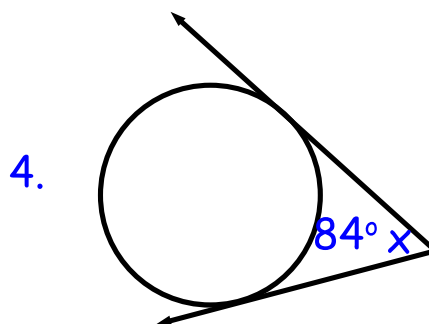
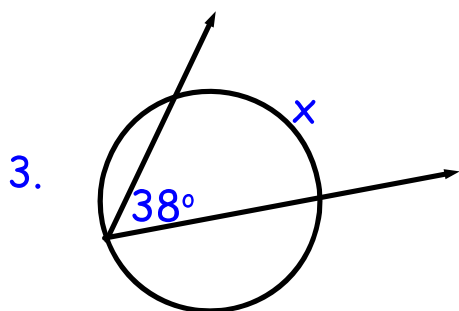
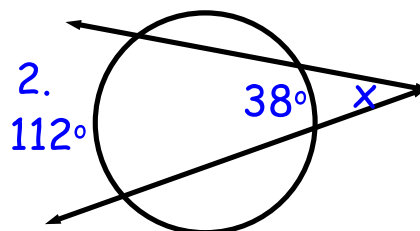
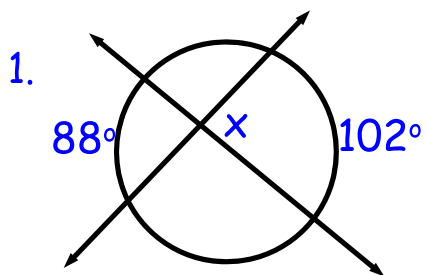


Geometry 2nd Semester Week 18 Monday



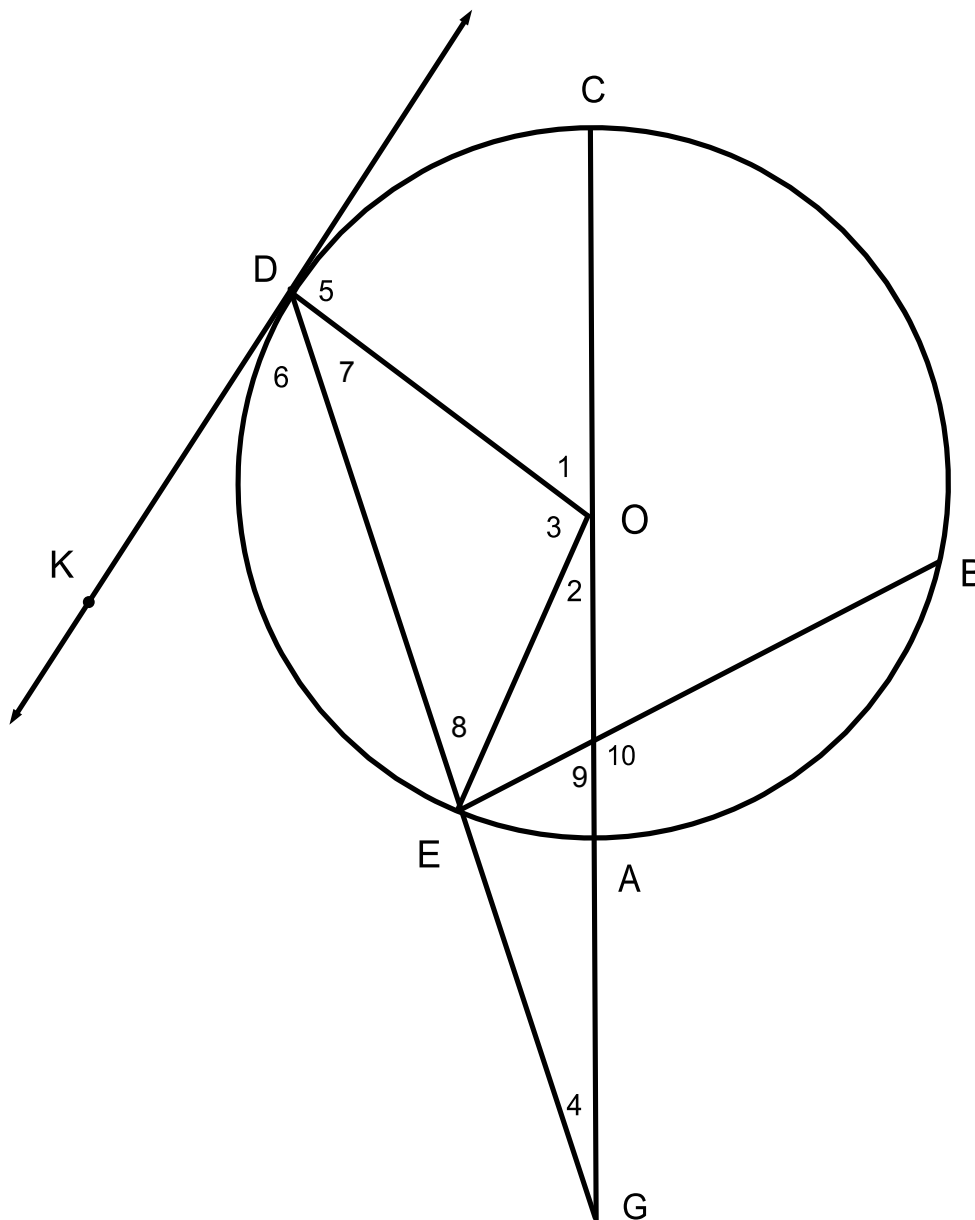
Tuesday's Warm-up Week 18

Work on Final Review #4 : 1-5
while I stamp homework

Geometry Week 18 Block Day Warm-up

Angles and Arcs of a Circle

Name _____



$$\begin{aligned} m \widehat{BC} &= 80^\circ \\ m \widehat{CD} &= 70^\circ \\ m \widehat{EA} &= 30^\circ \end{aligned}$$

- $m \angle 1 =$
- $m \angle 2 =$
- $m \angle 3 =$
- $m \angle 4 =$
- $m \angle 5 =$
- $m \angle 6 =$
- $m \angle 7 =$
- $m \angle 8 =$
- $m \angle 9 =$
- $m \angle 10 =$