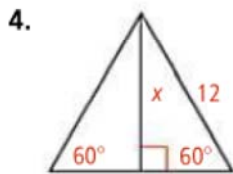
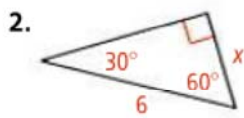
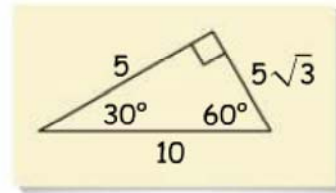


Homework: p.503-504: 2,4,5,15-20 all



**Do you UNDERSTAND?** MATHEMATICAL PRACTICES

**5. Error Analysis** Sandra drew the triangle below. Rika said that the labeled lengths are not possible. With which student do you agree? Explain.



**Algebra** Find the value of each variable. If your answer is not an integer, express it in simplest radical form.

See Problems 4 and 5.

