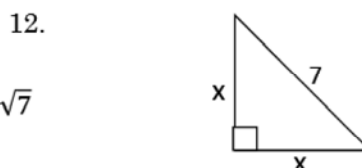
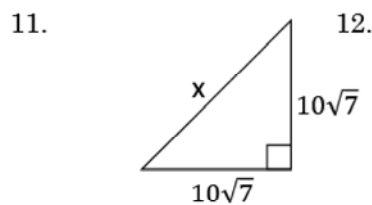
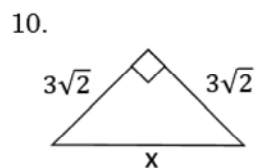
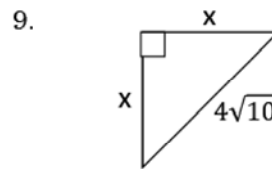
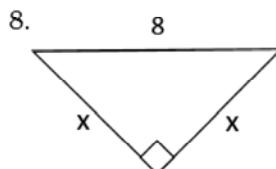
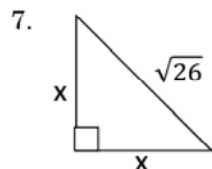
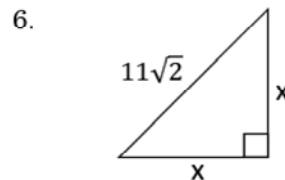
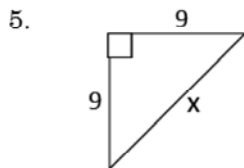
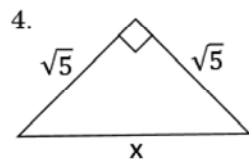
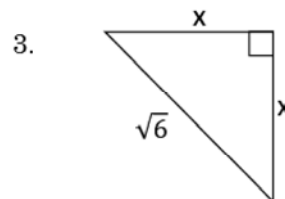
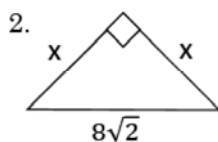
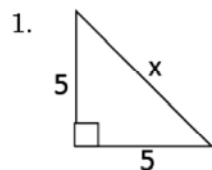
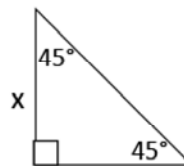


Special Triangles 4 – 45-45-90 Triangles

8.04

Use the facts that you discovered on page 3 in order to find the missing sides.

Label the missing sides in the triangle at the right, and then determine the missing sides in the 45-45-90 triangles below.



Selected scrambled answers: 6, $\sqrt{10}$, $4\sqrt{2}$, 8, $10\sqrt{14}$, $5\sqrt{2}$, 11, $4\sqrt{5}$, $\sqrt{13}$, $\sqrt{3}$