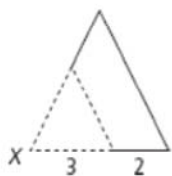


9.6C Homework

The dashed-line figure is a dilation of the solid-line figure. The labeled point is the center of dilation. Tell whether the dilation is an enlargement or a reduction. Then find the scale factor of the dilation.

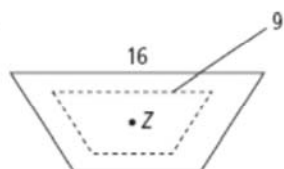
1.



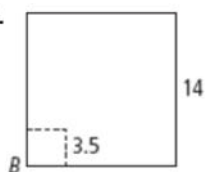
2.



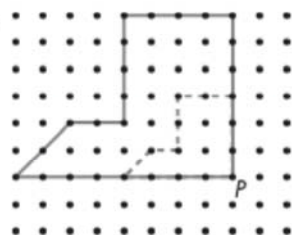
3.



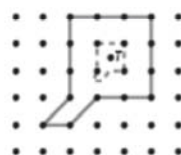
4.



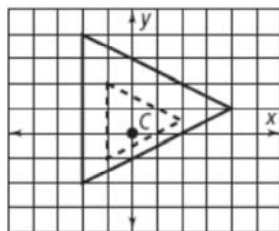
5.



6.



7.



8.

