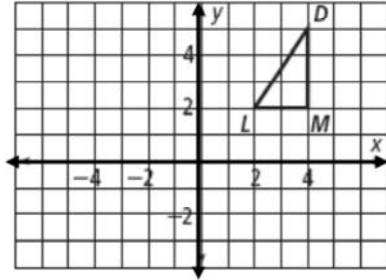


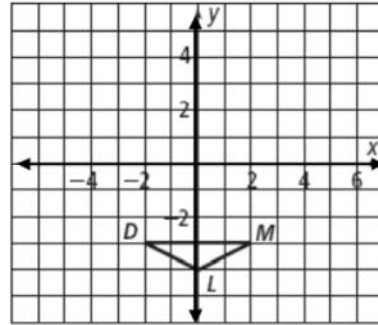
9.4 B Homework

Graph $\triangle DML$ and its glide reflection image.

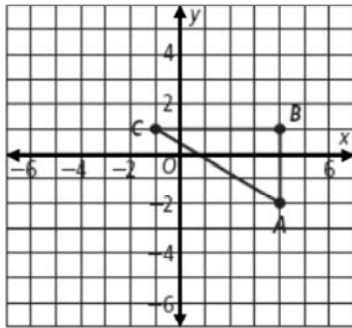
1. $(R_{y=1} \circ T_{\langle -1, 0 \rangle})(\triangle DML)$



2. $(R_{y=x} \circ T_{\langle -3, 3 \rangle})(\triangle DML)$



3. $(R_{y\text{-axis}} \circ T_{\langle 0, -3 \rangle})(\triangle ABC)$



4. $(R_{y=-1} \circ T_{\langle 1, -1 \rangle})(\triangle ABC)$

