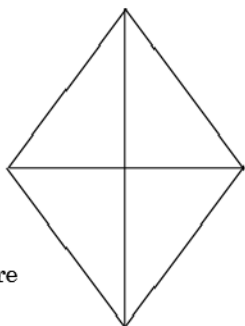


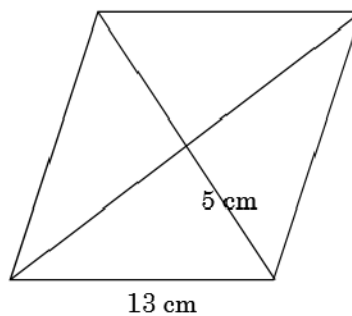
Use properties of the diagonals of rhombuses and kites to find the areas of the figures below.

1. Rhombus

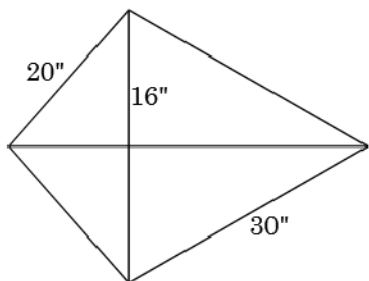


Diagonals are  
12 and 16

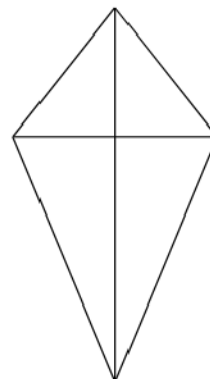
2. Rhombus



3. Kite



4. Kite



Diagonals are  
10 and 20

Scrambled Answers: 96, 100, 120, 598